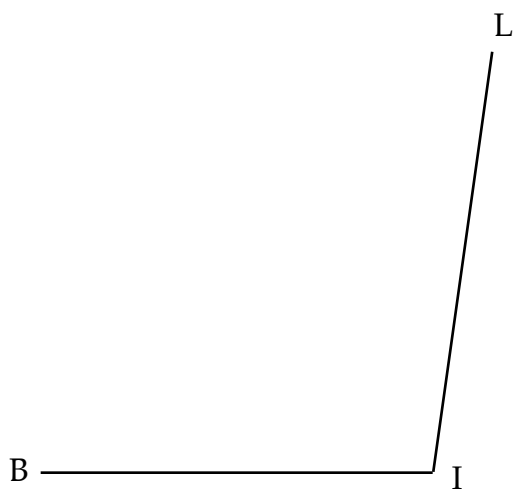


Name: _____ Date: _____

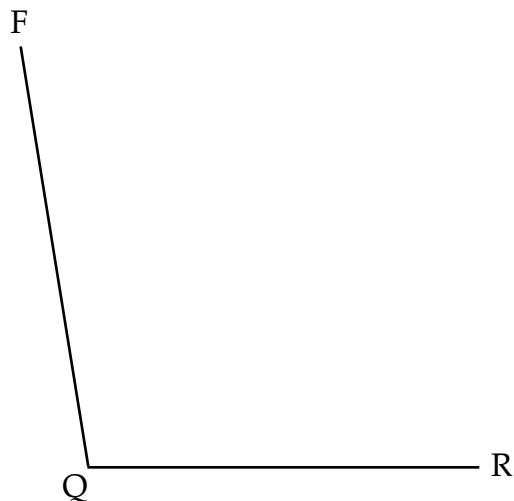
Using a Common Protractor

Exercise Two

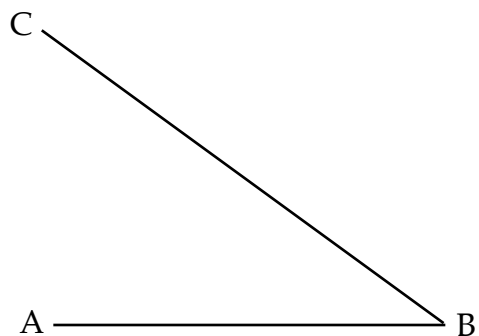
1. Color the angles below, then use a common protractor to measure them:



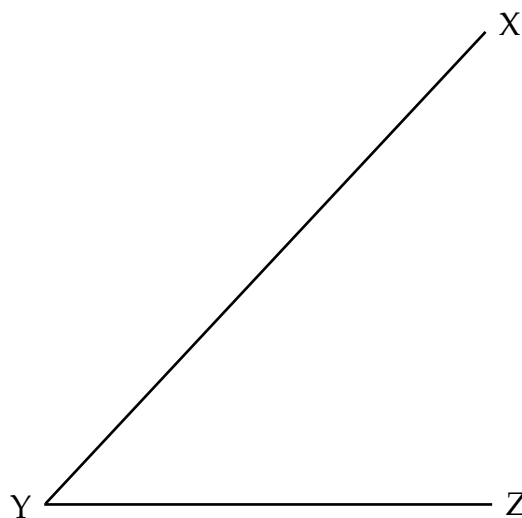
$\angle BIL =$ _____



$\angle FQR =$ _____



$\angle ABC =$ _____



$\angle XYZ =$ _____

2. Use a protractor to draw the following angles on the back of this sheet:

a. 10°

b. 170°

c. 45°

d. 135°

e. 90°